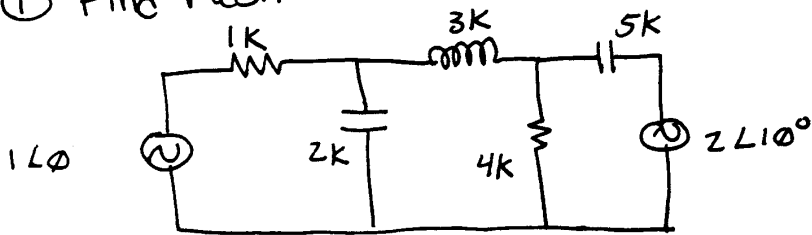
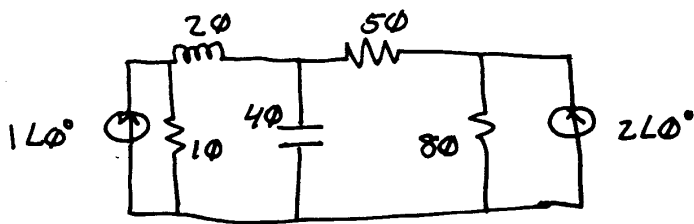


AC Circuits worksheet

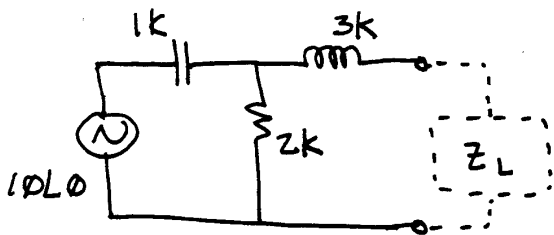
① Find Mesh:



② Find Nodal:

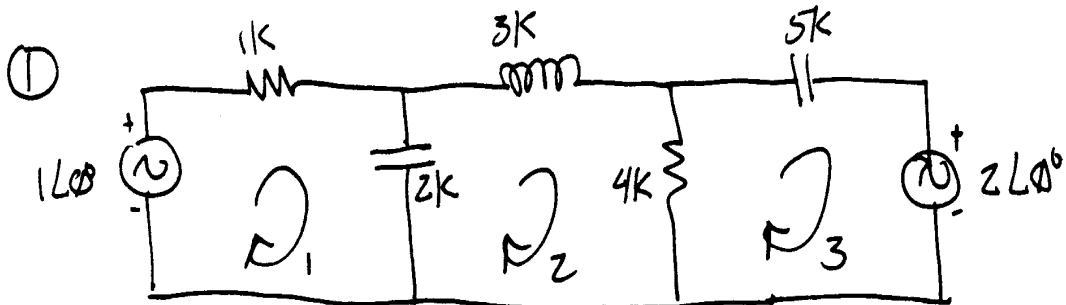


③ Find Thevenin + Norton Equivalents, find Z_L for max power transfer and P_L for that case.



④ A 120V system has 3 loads in parallel: A resistive 800W, A resistive 1200W, and a 2HP motor with $\eta = .85$ and a .7 lagging power factor. Draw the power triangle and determine a parallel load for a total $F_p = 1$.

AC CIRCUITS (ANSWERS)

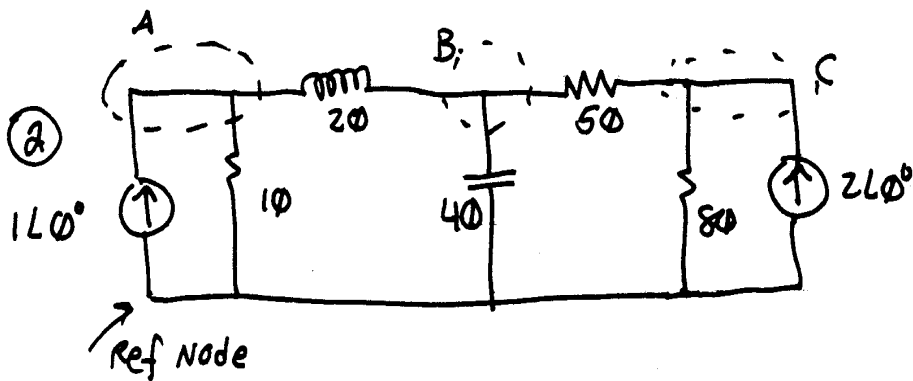


$$\#1: 1\angle 0^\circ = i_1(1k - j2k) - i_2(-j2k)$$

$$\#2: 0 = -i_1(-j2k) + i_2(4k + j3k - j2k) - i_3(4k)$$

$$\#3: -2\angle 0^\circ = -i_2(4k) + i_3(4k - j5k)$$

- combine, simplify, & solve -



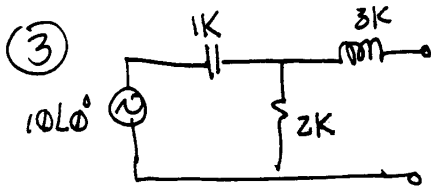
$$A: 1\angle 0^\circ = V_A\left(\frac{1}{10} + \frac{1}{j20}\right) - V_B\left(\frac{1}{j20}\right)$$

$$B: 0 = -V_A\left(\frac{1}{j20}\right) + V_B\left(\frac{1}{50} + \frac{1}{j20} - \frac{1}{j40}\right) - V_C\left(\frac{1}{50}\right)$$

$$C: 2\angle 0^\circ = -V_B\left(\frac{1}{50}\right) + V_C\left(\frac{1}{50} + \frac{1}{80}\right)$$

- combine, simplify, & solve -

AC CIRCUITS (ANSWERS, Z)



$$Z_{Th} = Z_N = (2k \parallel -j1k) + j3k$$

$$Z_{Th} = Z_N = 2.24k \angle 79.7^\circ$$

$$E_{Th} = 10\angle 0^\circ \cdot \frac{2k}{2k - j1k} = 8.94 \angle 26.6^\circ$$

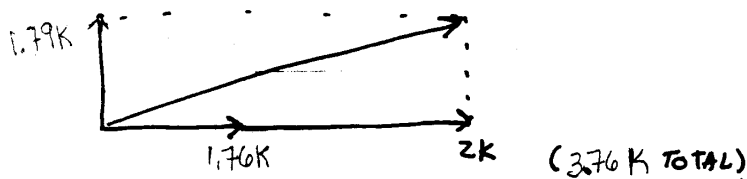
For I_N , either find the short circuit output current, or do a source conversion from the thevenin form.

$$I_N = E_{Th} / Z_{Th} = 8.94 \angle 26.6^\circ / 2.24k \angle 79.7^\circ = 3.99 \text{ mA} \angle -53.1^\circ$$

$$Z_L = 2.24k \angle -79.7^\circ \quad (400.5 - j2.2k)$$

$$P = \frac{E_{Th}^2}{4R} = \frac{8.94^2}{4 \cdot 400.5} = 49.9 \text{ mW}$$

- ④ Resistive = 2000W; Inductive $\Rightarrow 2HP \cdot 746W/HP \cdot 0.85 = 1.76 \text{ kW}$
 $F_p = \cos \theta$, $\theta = \cos^{-1} F_p = 45.6^\circ$ $S = 1.76 \text{ kW} / 0.7 = 2.51 \text{ kVA}$
 This is equivalent to: 1.76 kW resistive + 1.79 k Inductive.



Result: $4.16k \angle 25.5^\circ$ — Apparent power, in VA

To get back to $F_p = 1$, we need $Q = 1.79 \text{ kVAR}$ capacitive.

$$Q = \frac{V^2}{X_c}, \quad X_c = \frac{V^2}{Q} = \frac{120 \text{ VAC}^2}{1.79 \text{ kVAR}} = 8.04 \Omega$$

$$X_c = \frac{1}{2\pi f C} \quad C = \frac{1}{2\pi f X_c} = \frac{1}{2\pi 60 \text{ Hz} \cdot 8.04 \Omega} = 330 \mu\text{F}$$